

Question Paper Preview

Notations :

- 1.Options shown in green color and with ✓ icon are correct.
- 2.Options shown in red color and with ✗ icon are incorrect.

Subject Name :	Office Executive
Creation Date :	2021-09-08 19:14:45
Duration :	90
Total Marks :	85
Display Marks:	Yes
Share Answer Key With Delivery Engine :	No
Actual Answer Key :	Yes
Calculator :	None
Magnifying Glass Required? :	No
Ruler Required? :	No
Eraser Required? :	No
Scratch Pad Required? :	No
Rough Sketch/Notepad Required? :	No
Protractor Required? :	No
Show Watermark on Console? :	Yes
Highlighter :	No
Auto Save on Console? (SA type of questions will be always auto saved) :	No

Office Executive

Group Number : 1

Group Id :	275228338
Group Maximum Duration :	0
Group Minimum Duration :	90
Show Attended Group? :	No
Edit Attended Group? :	No
Break time :	0
Group Marks :	85
Is this Group for Examiner? :	No

General Awareness

Section Id :	275228475
Section Number :	1
Section type :	Online
Mandatory or Optional :	Mandatory
Number of Questions :	10
Number of Questions to be attempted :	10
Section Marks :	10
Enable Mark as Answered Mark for Review and Clear Response :	Yes
Sub-Section Number :	1
Sub-Section Id :	275228564
Question Shuffling Allowed :	Yes

Question Number : 1 Question Id : 2752286810 Question Type : MCQ Option Shuffling : Yes Is Question Mandatory : No Option Orientation : Vertical

Correct Marks : 1 Wrong Marks : 0.33

Who among the following freedom fighters is popularly known as 'Frontier Gandhi'?

Options :

1. ✖ Dr. Rajendra Prasad

2. ✖ Sardar Vallabhbhai Patel
3. ✔ Khan Abdul Ghaffar Khan
4. ✖ Jawaharlal Nehru

Question Number : 2 Question Id : 2752286811 Question Type : MCQ Option Shuffling : Yes Is

Question Mandatory : No Option Orientation : Vertical

Correct Marks : 1 Wrong Marks : 0.33

With which of the following dynasties is the Brihadeshwara temple associated?

Options :

1. ✔ Chola dynasty
2. ✖ Pallava dynasty
3. ✖ Sunga dynasty
4. ✖ Chalukya dynasty

Question Number : 3 Question Id : 2752286812 Question Type : MCQ Option Shuffling : Yes Is

Question Mandatory : No Option Orientation : Vertical

Correct Marks : 1 Wrong Marks : 0.33

The memorial of _____ is named 'Vijay Ghat'.

Options :

1. ✖ Lala Lajpat Rai
2. ✔ Lal Bahadur Shastri
3. ✖ Charan Singh
4. ✖ Dr. BR Ambedkar

Question Number : 4 Question Id : 2752286813 Question Type : MCQ Option Shuffling : Yes Is

Question Mandatory : No Option Orientation : Vertical

Correct Marks : 1 Wrong Marks : 0.33

Which of the following rivers is also known as 'Nerbudda' river?

Options :

1. ✖ Cauvery

2. ✖ Krishna
3. ✖ Godavari
4. ✔ Narmada

Question Number : 5 Question Id : 2752286814 Question Type : MCQ Option Shuffling : Yes Is

Question Mandatory : No Option Orientation : Vertical

Correct Marks : 1 Wrong Marks : 0.33

Which of the following countries' capital city is Cairo?

Options :

1. ✖ Zimbabwe
2. ✖ Portugal
3. ✖ South Korea
4. ✔ Egypt

Question Number : 6 Question Id : 2752286815 Question Type : MCQ Option Shuffling : Yes Is

Question Mandatory : No Option Orientation : Vertical

Correct Marks : 1 Wrong Marks : 0.33

Satyendranath Dutta is famous for his contribution as a:

Options :

1. ✖ Scientist
2. ✖ Doctor
3. ✔ Poet
4. ✖ Civil Servant

Question Number : 7 Question Id : 2752286816 Question Type : MCQ Option Shuffling : Yes Is

Question Mandatory : No Option Orientation : Vertical

Correct Marks : 1 Wrong Marks : 0.33

The Bengali novel SEI SAMAY is authored by:

Options :

1. ✔ Sunil Gangopadhyay

2. ✖ Syed Mujtaba Ali
3. ✖ Pramatha Choudhury
4. ✖ Bibhutibhushan Bandyopadhyay

Question Number : 8 Question Id : 2752286817 Question Type : MCQ Option Shuffling : Yes Is

Question Mandatory : No Option Orientation : Vertical

Correct Marks : 1 Wrong Marks : 0.33

What is the topic of the story 'Dena Paona' written by Tagore?

Options :

1. ✖ Satidaha
2. ✖ Independence movement
3. ✖ Women Education
4. ✔ Dowry

Question Number : 9 Question Id : 2752286818 Question Type : MCQ Option Shuffling : Yes Is

Question Mandatory : No Option Orientation : Vertical

Correct Marks : 1 Wrong Marks : 0.33

Which Viceroy of India declared the Partition of Bengal in 1905?

Options :

1. ✖ Lord Irwin
2. ✖ Lord Ripon
3. ✔ Lord Curzon
4. ✖ Lord Canning

Question Number : 10 Question Id : 2752286819 Question Type : MCQ Option Shuffling : Yes Is

Question Mandatory : No Option Orientation : Vertical

Correct Marks : 1 Wrong Marks : 0.33

In which year did Titanic sail?

Options :

1. ✔ 1912

2. ✖ 1812

3. ✖ 1905

4. ✖ 1922

Reasoning

Section Id :	275228476
Section Number :	2
Section type :	Online
Mandatory or Optional :	Mandatory
Number of Questions :	10
Number of Questions to be attempted :	10
Section Marks :	10
Enable Mark as Answered Mark for Review and Clear Response :	Yes
Sub-Section Number :	1
Sub-Section Id :	275228565
Question Shuffling Allowed :	Yes

Question Number : 11 Question Id : 2752286820 Question Type : MCQ Option Shuffling : Yes Is Question Mandatory : No Option Orientation : Vertical

Correct Marks : 1 Wrong Marks : 0.33

Select the option that is related to the third word in the same way as the second word is related to the first word.

USA : Dollar :: Russia : ?

Options :

1. ✖ Kyat

2. ✔ Ruble

3. ✖ Euro

4. ✖ Dinar

Question Number : 12 Question Id : 2752286821 Question Type : MCQ Option Shuffling : Yes Is Question Mandatory : No Option Orientation : Vertical

Correct Marks : 1 Wrong Marks : 0.33

In a certain code language, 'NATURAL' is written as 'LYFEHYN'. How will 'ACADEMY' be written in that language?

Options :

1. ✖ YWYVUNA

2. ✖ YWZVUMA

3. ✔ YWYVUMA

4. ✖ YXYVUMA

Question Number : 13 Question Id : 2752286822 Question Type : MCQ Option Shuffling : Yes Is Question Mandatory : No Option Orientation : Vertical

Correct Marks : 1 Wrong Marks : 0.33

P, Q, R, S, T, V are six members in a family. P and Q are a married couple. Q is the daughter-in-law of V. S is the only son of R. T is the sister of S. R is P's brother. How is T related to R?

Options :

1. ✖ Mother

2. ✖ Wife

3. ✔ Daughter

4. ✖ Aunt

Question Number : 14 Question Id : 2752286823 Question Type : MCQ Option Shuffling : Yes Is Question Mandatory : No Option Orientation : Vertical

Correct Marks : 1 Wrong Marks : 0.33

Shreya walks 12 m towards the east, then turns right and walks 18 m. Again, she turns to her left and walks 12 m. What is the shortest distance between her initial and final positions?

Options :

1. ✓ 30 m

2. ✗ 42 m

3. ✗ 36 m

4. ✗ 48 m

Question Number : 15 Question Id : 2752286824 Question Type : MCQ Option Shuffling : Yes Is Question Mandatory : No Option Orientation : Vertical

Correct Marks : 1 Wrong Marks : 0.33

Select the number from among the given options that can replace the question mark (?) in the following series.

27, 53, 87, 129, ?

Options :

1. ✗ 177

2. ✗ 181

3. ✗ 175

4. ✓ 179

Question Number : 16 Question Id : 2752286825 Question Type : MCQ Option Shuffling : Yes Is Question Mandatory : No Option Orientation : Vertical

Correct Marks : 1 Wrong Marks : 0.33

If '÷' means subtraction, '-' means division, '×' means addition, and '+' means multiplication, then find the value of the following expression.

$30 - 6 + 5 \times 4 \div 2$

Options :

1. ✗ 32

2. ✗ 35

3. ✓ 27

4. ✗ 25

Question Number : 17 Question Id : 2752286826 Question Type : MCQ Option Shuffling : Yes Is

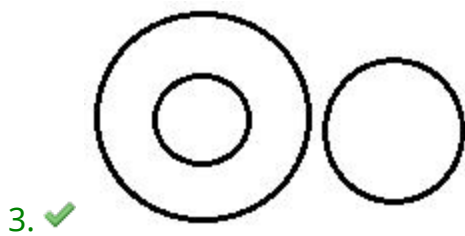
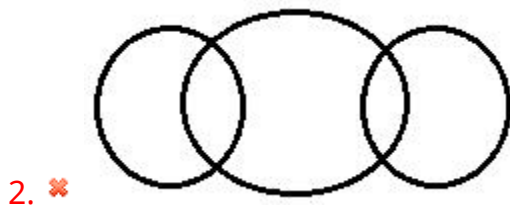

Question Mandatory : No Option Orientation : Vertical

Correct Marks : 1 Wrong Marks : 0.33

Select the Venn diagram that best represents the relationship between the following classes.

Madhya Pradesh, Indore, Hyderabad

Options :

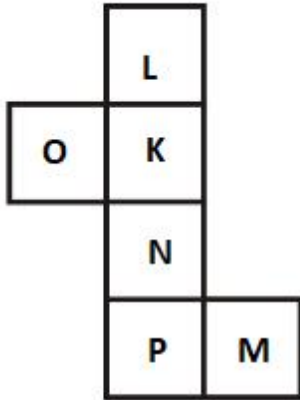


Question Number : 18 Question Id : 2752286827 Question Type : MCQ Option Shuffling : Yes Is

Question Mandatory : No Option Orientation : Vertical

Correct Marks : 1 Wrong Marks : 0.33

Select the dice that can be formed by folding the given sheet along the lines.



(i)



(ii)



(iii)



(iv)

Options :

1. ✖ Only (i)
2. ✖ Only (ii)
3. ✔ Only (iii)
4. ✖ Only (iv)

Question Number : 19 Question Id : 2752286828 Question Type : MCQ Option Shuffling : Yes Is

Question Mandatory : No Option Orientation : Vertical

Correct Marks : 1 Wrong Marks : 0.33

Select the correct mirror image of the given figure when the mirror is placed to the right side of the figure.

ACHIEVED


Options :

1. ✖ ACHIEVED
2. ✖ IHCAEVED
3. ✖ HIEACVED

Question Number : 20 Question Id : 2752286829 Question Type : MCQ Option Shuffling : Yes Is Question Mandatory : No Option Orientation : Vertical

Correct Marks : 1 Wrong Marks : 0.33

Select the figure from the options that can replace the question mark (?) and complete the pattern.



Options :





Quantitative Aptitude

Section Id :	275228477
Section Number :	3
Section type :	Online
Mandatory or Optional :	Mandatory
Number of Questions :	20
Number of Questions to be attempted :	20
Section Marks :	20
Enable Mark as Answered Mark for Review and Clear Response :	Yes
Sub-Section Number :	1
Sub-Section Id :	275228566
Question Shuffling Allowed :	Yes

Question Number : 21 Question Id : 2752286830 Question Type : MCQ Option Shuffling : Yes Is Question Mandatory : No Option Orientation : Vertical

Correct Marks : 1 Wrong Marks : 0.33

What is the value of $[84 \div 14 - 3 \times 2] + (20 - 8) \div 4$?

Options :

1. ✖ 1

2. ✖ 2

3. ✔ 3

4. ✖ 4

Question Number : 22 Question Id : 2752286831 Question Type : MCQ Option Shuffling : Yes Is

Question Mandatory : No Option Orientation : Vertical

Correct Marks : 1 Wrong Marks : 0.33

Ravi had a \$100 note. He paid \$49.57 for a pair of shoes, \$20.36 for a belt and \$5.29 for a tie. How much of the \$100 does Ravi still have?

Options :

1. ✖ \$24.88

2. ✔ \$24.78

3. ✖ \$24.82

4. ✖ \$24.68

Question Number : 23 Question Id : 2752286832 Question Type : MCQ Option Shuffling : Yes Is

Question Mandatory : No Option Orientation : Vertical

Correct Marks : 1 Wrong Marks : 0.33

$\frac{3}{4}$ of the cost of item A is equal to $\frac{2}{5}$ of the cost of item B. If the cost of item B is ₹ 570, what is the cost of item A?

Options :

1. ✔ ₹ 304

2. ✖ ₹ 300

3. ✖ ₹ 296

4. ✖ ₹ 308

Question Number : 24 Question Id : 2752286833 Question Type : MCQ Option Shuffling : Yes Is Question Mandatory : No Option Orientation : Vertical

Correct Marks : 1 Wrong Marks : 0.33

Find the greatest four digit number which when divided by 25, 30, 36 and 40 leaves remainders of 18, 23, 29 and 33, respectively.

Options :

1. ✖ 9983

2. ✖ 9992

3. ✔ 8993

4. ✖ 9997

Question Number : 25 Question Id : 2752286834 Question Type : MCQ Option Shuffling : Yes Is Question Mandatory : No Option Orientation : Vertical

Correct Marks : 1 Wrong Marks : 0.33

The sum of two natural numbers x and y is 588 and the HCF of these two numbers is 49. How many such pairs (x, y) are there, if $x > y$?

Options :

1. ✖ 1

2. ✔ 2

3. ✖ 3

4. ✖ 4

Question Number : 26 Question Id : 2752286835 Question Type : MCQ Option Shuffling : Yes Is

Question Mandatory : No Option Orientation : Vertical

Correct Marks : 1 Wrong Marks : 0.33

The ratio of apple juice and peach juice in a mixed juice is 5 : 9. If 16 more litres of apple juice is added, the ratio will change to 3 : 5. How many litres of peach juice is there in the mix?

Options :

1. ✖ 378

2. ✖ 396

3. ✖ 315

4. ✔ 360

Question Number : 27 Question Id : 2752286836 Question Type : MCQ Option Shuffling : Yes Is

Question Mandatory : No Option Orientation : Vertical

Correct Marks : 1 Wrong Marks : 0.33

The average of five numbers is 15 while the average of the smallest and the greatest of them is 12. What is the average of the remaining three numbers?

Options :

1. ✖ 16

2. ✔ 17

3. ✖ 18

4. ✖ 19

Question Number : 28 Question Id : 2752286837 Question Type : MCQ Option Shuffling : Yes Is

Question Mandatory : No Option Orientation : Vertical

Correct Marks : 1 Wrong Marks : 0.33

An item is sold for ₹ 3,150, thereby incurring a loss of 37%. What is the cost price of the item?

Options :

1. ✖ ₹ 4,500

2. ✖ ₹ 4,800

3. ✖ ₹ 5,250

4. ✔ ₹ 5,000

Question Number : 29 Question Id : 2752286838 Question Type : MCQ Option Shuffling : Yes Is

Question Mandatory : No Option Orientation : Vertical

Correct Marks : 1 Wrong Marks : 0.33

Which of the following numbers is divisible by 8?

Options :

1. ✖ 1002

2. ✖ 1012

3. ✔ 1112

4. ✖ 1122

Question Number : 30 Question Id : 2752286839 Question Type : MCQ Option Shuffling : Yes Is

Question Mandatory : No Option Orientation : Vertical

Correct Marks : 1 Wrong Marks : 0.33

What is the value of $0.\bar{3} \times 3$?

Options :

1. ✖ 0.9999999

2. ✓ 1

3. ✗ 0.9

4. ✗ 0.99

Question Number : 31 Question Id : 2752286840 Question Type : MCQ Option Shuffling : Yes Is Question Mandatory : No Option Orientation : Vertical

Correct Marks : 1 Wrong Marks : 0.33

A truck travels 135 m in 6 seconds and reaches its destination in 1 hour 15 minutes. A tempo however, takes 15 more minutes to cover the same distance. Find the speed of the tempo in km/h.

Options :

1. ✓ 67.5

2. ✗ 70

3. ✗ 62.5

4. ✗ 72

Question Number : 32 Question Id : 2752286841 Question Type : MCQ Option Shuffling : Yes Is Question Mandatory : No Option Orientation : Vertical

Correct Marks : 1 Wrong Marks : 0.33

The average of 48, x and y is 50. What is the average of x and y ?

Options :

1. ✗ 52

2. ✗ 52.5

3. ✓ 51

4. ✗ 49.5

Question Number : 33 Question Id : 2752286842 Question Type : MCQ Option Shuffling : Yes Is

Question Mandatory : No Option Orientation : Vertical

Correct Marks : 1 Wrong Marks : 0.33

The interest earned on €2750 @ 7% simple interest per annum for 2 years will be:

Options :

1. ✗ €405

2. ✗ €390

3. ✓ €385

4. ✗ €375

Question Number : 34 Question Id : 2752286843 Question Type : MCQ Option Shuffling : Yes Is

Question Mandatory : No Option Orientation : Vertical

Correct Marks : 1 Wrong Marks : 0.33

The LCM and the HCF of 148 and x are 444 and 74, respectively. What is the value of x ?

Options :

1. ✗ 111

2. ✓ 222

3. ✗ 333

4. ✗ 555

Question Number : 35 Question Id : 2752286844 Question Type : MCQ Option Shuffling : Yes Is Question Mandatory : No Option Orientation : Vertical

Correct Marks : 1 Wrong Marks : 0.33

What is the value of 3.7% of 20% of 1000?

Options :

1. ✖ 74

2. ✔ 7.4

3. ✖ 3.7

4. ✖ 37

Question Number : 36 Question Id : 2752286845 Question Type : MCQ Option Shuffling : Yes Is Question Mandatory : No Option Orientation : Vertical

Correct Marks : 1 Wrong Marks : 0.33

The selling price of an item inclusive of a 15% profit was ₹ 920. What would be the percentage loss if the item was sold for ₹ 740?

Options :

1. ✖ 8.4%

2. ✖ 8%

3. ✔ 7.5%

4. ✖ 6.25%

Question Number : 37 Question Id : 2752286846 Question Type : MCQ Option Shuffling : Yes Is

Question Mandatory : No Option Orientation : Vertical

Correct Marks : 1 Wrong Marks : 0.33

Which of the following numbers is divisible by 15?

Options :

1. ✖ 98765

2. ✖ 88765

3. ✔ 78765

4. ✖ 68765

Question Number : 38 Question Id : 2752286847 Question Type : MCQ Option Shuffling : Yes Is

Question Mandatory : No Option Orientation : Vertical

Correct Marks : 1 Wrong Marks : 0.33

The number 72 is divided in the ratio 5 : 4. What is the product of the two parts that 72 is divided into?

Options :

1. ✔ 1280

2. ✖ 1200

3. ✖ 1080

4. ✖ 1440

Question Number : 39 Question Id : 2752286848 Question Type : MCQ Option Shuffling : Yes Is

Question Mandatory : No Option Orientation : Vertical

Correct Marks : 1 Wrong Marks : 0.33

A rectangle was 25 m long and 12.8 m wide. A square had an area that was 80% of the area of the rectangle. What was the length of each side of the square?

Options :

1. ✖ 18 m

2. ✔ 16 m

3. ✖ 15 m

4. ✖ 12 m

Question Number : 40 Question Id : 2752286849 Question Type : MCQ Option Shuffling : Yes Is

Question Mandatory : No Option Orientation : Vertical

Correct Marks : 1 Wrong Marks : 0.33

If the area of a rectangle is 196 m^2 and its length is 28 m, what is the perimeter of the rectangle?

Options :

1. ✔ 70 m

2. ✖ 56 m

3. ✖ 84 m

4. ✖ 64 m

General English

Section Id : 275228478

Section Number : 4

Section type : Online

Mandatory or Optional : Mandatory

Number of Questions : 20

Number of Questions to be attempted :	20
Section Marks :	20
Enable Mark as Answered Mark for Review and Clear Response :	Yes
Sub-Section Number :	1
Sub-Section Id :	275228567
Question Shuffling Allowed :	Yes

Question Number : 41 Question Id : 2752286850 Question Type : MCQ Option Shuffling : Yes Is Question Mandatory : No Option Orientation : Vertical Correct Marks : 1 Wrong Marks : 0.33

Select the most appropriate synonym of the given word.

Primitive

Options :

1. ✖ Cultured
2. ✔ Primaeval
3. ✖ Modern
4. ✖ Auxiliary

Question Number : 42 Question Id : 2752286851 Question Type : MCQ Option Shuffling : Yes Is Question Mandatory : No Option Orientation : Vertical Correct Marks : 1 Wrong Marks : 0.33

Select the most appropriate ANTONYM of the given word.

Offend

Options :

1. ✔ Flatter
2. ✖ Pique
3. ✖ Nettle
4. ✖ Scrunch

Question Number : 43 Question Id : 2752286852 Question Type : MCQ Option Shuffling : Yes Is Question Mandatory : No Option Orientation : Vertical

Correct Marks : 1 Wrong Marks : 0.33

Select the most appropriate ANTONYM of the given word.

Demolish

Options :

1. ✖ Pulverise
2. ✔ Mend
3. ✖ Mull
4. ✖ Atomise

Question Number : 44 Question Id : 2752286853 Question Type : MCQ Option Shuffling : Yes Is Question Mandatory : No Option Orientation : Vertical

Correct Marks : 1 Wrong Marks : 0.33

Select the correctly spelt word.

Options :

1. ✔ Souvenir
2. ✖ Spaghatti
3. ✖ Defenation
4. ✖ Tution

Question Number : 45 Question Id : 2752286854 Question Type : MCQ Option Shuffling : Yes Is Question Mandatory : No Option Orientation : Vertical

Correct Marks : 1 Wrong Marks : 0.33

Select the correctly spelt word.

Options :

1. ✖ Cripller
2. ✔ Continuum

3. ✖ Vaccum

4. ✖ Peperry

Question Number : 46 Question Id : 2752286855 Question Type : MCQ Option Shuffling : Yes Is

Question Mandatory : No Option Orientation : Vertical

Correct Marks : 1 Wrong Marks : 0.33

Select the INCORRECTLY spelt word.

Options :

1. ✖ Remedial

2. ✖ Quotation

3. ✖ Ruminare

4. ✔ Excoetate

Question Number : 47 Question Id : 2752286856 Question Type : MCQ Option Shuffling : Yes Is

Question Mandatory : No Option Orientation : Vertical

Correct Marks : 1 Wrong Marks : 0.33

Select the most appropriate meaning of the given idiom.

Spill the beans

Options :

1. ✖ To scatter the beans on the floor

2. ✔ To give away a secret

3. ✖ To wish someone luck

4. ✖ To be undecided

Question Number : 48 Question Id : 2752286857 Question Type : MCQ Option Shuffling : Yes Is

Question Mandatory : No Option Orientation : Vertical

Correct Marks : 1 Wrong Marks : 0.33

Select the most appropriate option to fill in the blanks.

I read a _____ about a fox with a straight _____.

Options :

1. ✖ tail; tale
2. ✔ tale; tail
3. ✖ tale; tale
4. ✖ tail; tail

Question Number : 49 Question Id : 2752286858 Question Type : MCQ Option Shuffling : Yes Is

Question Mandatory : No Option Orientation : Vertical

Correct Marks : 1 Wrong Marks : 0.33

Select the most appropriate option to fill in the blanks.

The doctor treated the _____ with a lot of _____.

Options :

1. ✖ patients; patients
2. ✖ patience; patience
3. ✔ patients; patience
4. ✖ patience; patients

Question Number : 50 Question Id : 2752286859 Question Type : MCQ Option Shuffling : Yes Is

Question Mandatory : No Option Orientation : Vertical

Correct Marks : 1 Wrong Marks : 0.33

Select the most appropriate option to fill in the blanks.

Sitting on the _____, I sieved some _____ to bake a few _____ shaped cookies.

Options :

1. ✖ flour; floor; flower
2. ✖ flower; flour; floor
3. ✖ flour; flower; floor
4. ✔ floor; flour; flower

Question Number : 51 Question Id : 2752286860 Question Type : MCQ Option Shuffling : Yes Is

Question Mandatory : No Option Orientation : Vertical

Correct Marks : 1 Wrong Marks : 0.33

Select the option that can be used as a one-word substitute for the given group of words.

Printing using a stone or a metal plate with a completely smooth surface

Options :

1. ✖ Calligraphy
2. ✔ Lithography
3. ✖ Graphology
4. ✖ Entomology

Question Number : 52 Question Id : 2752286861 Question Type : MCQ Option Shuffling : Yes Is

Question Mandatory : No Option Orientation : Vertical

Correct Marks : 1 Wrong Marks : 0.33

Select the option that can be used as a one-word substitute for the given group of words.

The doctor who specialises in root canal and nerve treatment

Options :

1. ✖ Chiropodist
2. ✔ Endodontist
3. ✖ Orthodontist
4. ✖ Periodontist

Question Number : 53 Question Id : 2752286862 Question Type : MCQ Option Shuffling : Yes Is

Question Mandatory : No Option Orientation : Vertical

Correct Marks : 1 Wrong Marks : 0.33

Select the most appropriate simile to fill in the blank.

Mother scolded her two sons for fighting _____.

Options :

1. ✖ like cat and mouse
2. ✖ like lions and tigers
3. ✔ like cats and dogs
4. ✖ like jackals and wolves

Question Number : 54 Question Id : 2752286863 Question Type : MCQ Option Shuffling : Yes Is Question Mandatory : No Option Orientation : Vertical

Correct Marks : 1 Wrong Marks : 0.33

Select the most appropriate option that represents the correct figure of speech to which the underlined words belong.

My sister and I always have a friendly fight over the TV remote.

Options :

1. ✖ Hyperbole
2. ✖ Metaphor
3. ✖ Simile
4. ✔ Oxymoron

Question Number : 55 Question Id : 2752286864 Question Type : MCQ Option Shuffling : Yes Is Question Mandatory : No Option Orientation : Vertical

Correct Marks : 1 Wrong Marks : 0.33

The following sentence has been divided into parts. One of them may contain an error. Select the part that contains the error from the given options. If you don't find any error, mark 'No error' as your answer.

It is considered a false true / that a broken mirror / means bad luck.

Options :

1. ✔ It is considered a false true
2. ✖ that a broken mirror
3. ✖ means bad luck.
4. ✖ No error

Question Number : 56 Question Id : 2752286865 Question Type : MCQ Option Shuffling : Yes Is Question Mandatory : No Option Orientation : Vertical

Correct Marks : 1 Wrong Marks : 0.33

Select the most appropriate option that can substitute the underlined segment in the given sentence. If there is no need to substitute it, select 'No substitution required'.

We reached the top of the hill, dropped our backpacks and stretched out in the soft grass that covered the cool earth.

Options :

1. ✖ between the soft grass
2. ✖ into the soft grass
3. ✔ on the soft grass
4. ✖ No substitution required

Question Number : 57 Question Id : 2752286866 Question Type : MCQ Option Shuffling : Yes Is Question Mandatory : No Option Orientation : Vertical

Correct Marks : 1 Wrong Marks : 0.33

Select the most appropriate option that can substitute the underlined segment in the given sentence. If there is no need to substitute it, select 'No substitution required'.

She still work hard, though she is now old.

Options :

1. ✔ works hard
2. ✖ worked hard
3. ✖ work harder
4. ✖ No substitution required

Question Number : 58 Question Id : 2752286867 Question Type : MCQ Option Shuffling : Yes Is Question Mandatory : No Option Orientation : Vertical

Correct Marks : 1 Wrong Marks : 0.33

Select the most appropriate option that can substitute the underlined segment in the given sentence. If there is no need to substitute it, select 'No substitution required'.

If you take care of the pence, the pounds will take care of themselves.

Options :

1. ✖ took care
2. ✖ takes care
3. ✖ taking care
4. ✔ No substitution required

Question Number : 59 Question Id : 2752286868 Question Type : MCQ Option Shuffling : Yes Is Question Mandatory : No Option Orientation : Vertical

Correct Marks : 1 Wrong Marks : 0.33

Select the most appropriate option that can substitute the underlined segment in the given sentence. If there is no need to substitute it, select 'No substitution required'.

Besides loot the house, they wounded the inmates.

Options :

1. ✖ looted the house
2. ✖ loots the house
3. ✔ looting the house
4. ✖ No substitution required

Question Number : 60 Question Id : 2752286869 Question Type : MCQ Option Shuffling : Yes Is Question Mandatory : No Option Orientation : Vertical

Correct Marks : 1 Wrong Marks : 0.33

Select the most appropriate meaning of the given proverb.

Good things come to those who wait

Options :

1. ✖ Waiting helps you to get all the good things you want to buy

2. ✖ All the good things are delivered to those who wait
3. ✖ One who waits on the work has higher chance of success
4. ✔ Patience is often rewarded

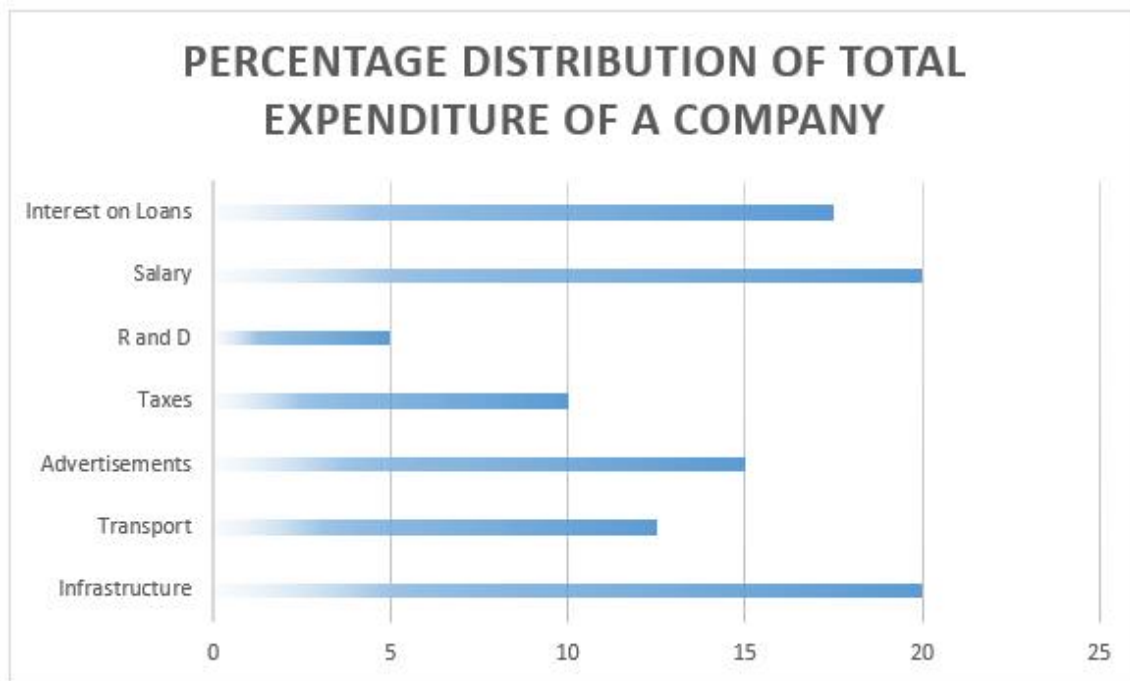
Data Analysis Data Interpretation & Data Sufficiency

Section Id :	275228479
Section Number :	5
Section type :	Online
Mandatory or Optional :	Mandatory
Number of Questions :	5
Number of Questions to be attempted :	5
Section Marks :	5
Enable Mark as Answered Mark for Review and Clear Response :	Yes
Sub-Section Number :	1
Sub-Section Id :	275228568
Question Shuffling Allowed :	Yes

Question Number : 61 Question Id : 2752286870 Question Type : MCQ Option Shuffling : Yes Is Question Mandatory : No Option Orientation : Vertical

Correct Marks : 1 Wrong Marks : 0.33

The following bar graph shows the percentage distribution of the total expenditure of a company under various expense heads during 2020.



If the expenditure on Taxes is Rs. 2.5 crores, then what is the difference (in Rs.) between expenditures on Salary and Advertisements?

Options :

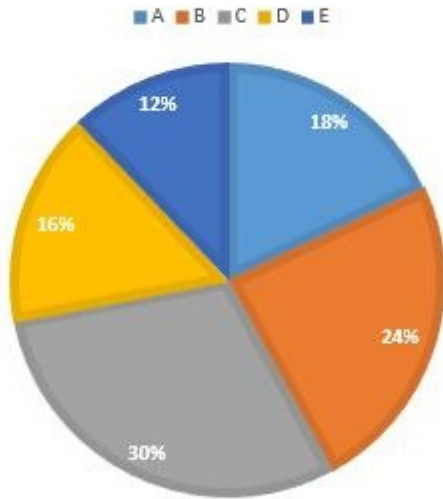
- 1. ✓ 1,25,00,000
- 2. ✗ 3,50,00,000
- 3. ✗ 3,00,00,000
- 4. ✗ 2,50,00,000

Question Number : 62 Question Id : 2752286871 Question Type : MCQ Option Shuffling : Yes Is Question Mandatory : No Option Orientation : Vertical

Correct Marks : 1 Wrong Marks : 0.33

The following pie chart shows the percentage of bags available in various stores in March 2020. The total number of bags available in all stores is 1200.

PERCENTAGE OF BAGS AVAILABLE IN VARIOUS STORES



What is the central angle corresponding to the number of bags available in store B?

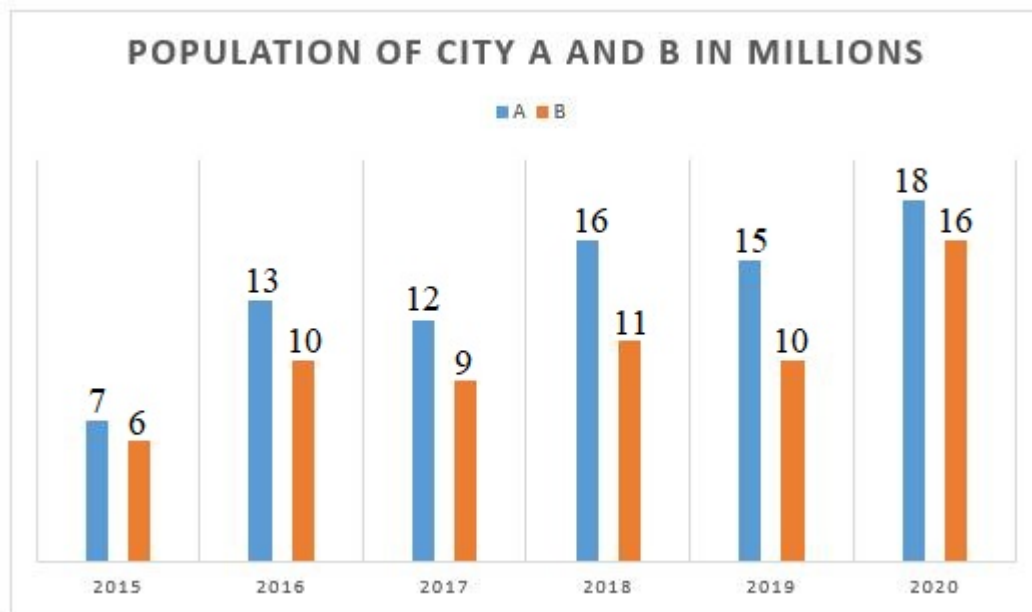
Options :

1. ✖ 83.2°
2. ✔ 86.4°
3. ✖ 82.6°
4. ✖ 88.8°

Question Number : 63 Question Id : 2752286872 Question Type : MCQ Option Shuffling : Yes Is Question Mandatory : No Option Orientation : Vertical

Correct Marks : 1 Wrong Marks : 0.33

The following chart shows the population of two cities A and B in various years from 2015 to 2020.



In which year is the population difference between city A and city B minimum?

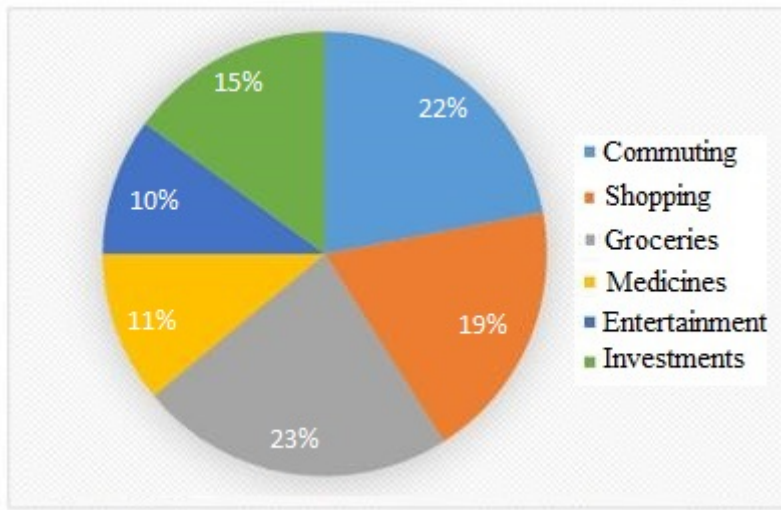
Options :

- 1. ✓ 2015
- 2. ✗ 2016
- 3. ✗ 2018
- 4. ✗ 2020

Question Number : 64 Question Id : 2752286873 Question Type : MCQ Option Shuffling : Yes Is Question Mandatory : No Option Orientation : Vertical

Correct Marks : 1 Wrong Marks : 0.33

The following pie chart gives the information related to the expenditures of a family in a particular month. The total expenditure of the month is Rs. 45,000.



The sum of central angles of which two expenditures of the family add up to 108° ?

Options :

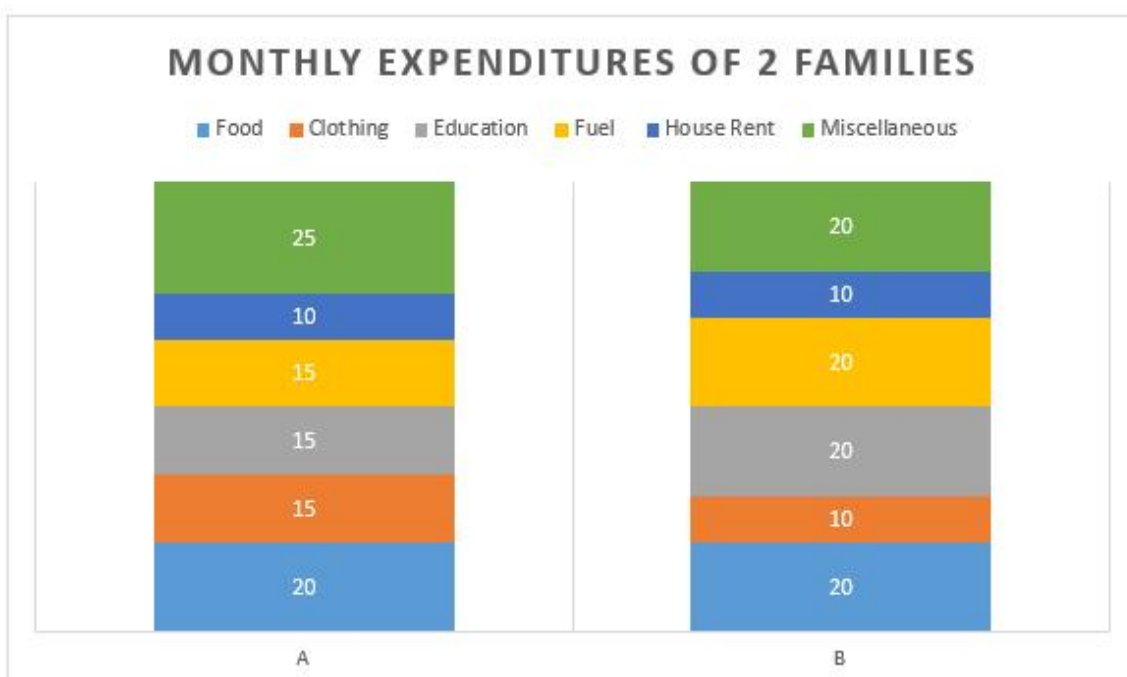
1. ✓ Shopping and Medicines
2. ✗ Entertainment and Investments
3. ✗ Shopping and Commuting
4. ✗ Groceries and Medicines

Question Number : 65 Question Id : 2752286874 Question Type : MCQ Option Shuffling : Yes Is

Question Mandatory : No Option Orientation : Vertical

Correct Marks : 1 Wrong Marks : 0.33

The following stacked column gives information regarding monthly expenditures of 2 families.



If the total monthly expenditure for family A is Rs. 30,000 and for family B is Rs. 40,000, then what is the sum of money spent by family A on Clothing and family B on House Rent?

Options :

- 1. ✖ Rs. 8,000
- 2. ✖ Rs. 7,500
- 3. ✔ Rs. 8,500
- 4. ✖ Rs. 7,000

Computer Proficiency (MS-Office)

Section Id :	275228480
Section Number :	6
Section type :	Online
Mandatory or Optional :	Mandatory
Number of Questions :	20
Number of Questions to be attempted :	20
Section Marks :	20
Enable Mark as Answered Mark for Review and Clear Response :	Yes
Sub-Section Number :	1
Sub-Section Id :	275228569
Question Shuffling Allowed :	Yes

Question Number : 66 Question Id : 2752286875 Question Type : MCQ Option Shuffling : Yes Is Question Mandatory : No Option Orientation : Vertical Correct Marks : 1 Wrong Marks : 0.33

Which of the following is the third menu tab in Microsoft Word 2016?

Options :

- 1. ✖ Review

2. ✓ Insert
3. ✗ Home
4. ✗ Layout

Question Number : 67 Question Id : 2752286876 Question Type : MCQ Option Shuffling : Yes Is Question Mandatory : No Option Orientation : Vertical

Correct Marks : 1 Wrong Marks : 0.33

Which of the following command groups appearing under the 'Home' menu tab contains features such as change case, subscript and superscript in Microsoft Word 2016?

Options :

1. ✓ Font
2. ✗ Paragraph
3. ✗ Clipboard
4. ✗ Styles

Question Number : 68 Question Id : 2752286877 Question Type : MCQ Option Shuffling : Yes Is Question Mandatory : No Option Orientation : Vertical

Correct Marks : 1 Wrong Marks : 0.33

Which of the following keyboard shortcuts can be used to insert a hyperlink in a Microsoft Word 2016 document?

Options :

1. ✓ Ctrl+K
2. ✗ Ctrl+L
3. ✗ Ctrl+H
4. ✗ Alt+K

Question Number : 69 Question Id : 2752286878 Question Type : MCQ Option Shuffling : Yes Is Question Mandatory : No Option Orientation : Vertical

Correct Marks : 1 Wrong Marks : 0.33

Which of the following is NOT a valid document view option in Microsoft Word 2016?

Options :

1. ✖ Print Layout
2. ✖ Outline
3. ✖ Draft
4. ✔ Write mode

Question Number : 70 Question Id : 2752286879 Question Type : MCQ Option Shuffling : Yes Is Question Mandatory : No Option Orientation : Vertical

Correct Marks : 1 Wrong Marks : 0.33

Features such as ruler, gridlines and macros appear under the _____ menu tab in Microsoft Word 2016.

Options :

1. ✖ Home
2. ✖ Review
3. ✔ View
4. ✖ Layout

Question Number : 71 Question Id : 2752286880 Question Type : MCQ Option Shuffling : Yes Is Question Mandatory : No Option Orientation : Vertical

Correct Marks : 1 Wrong Marks : 0.33

What is the largest font size value that can be selected from the font size dropdown list in Microsoft Word 2016?

Options :

1. ✖ 64
2. ✔ 72
3. ✖ 84
4. ✖ 96

Question Number : 72 Question Id : 2752286881 Question Type : MCQ Option Shuffling : Yes Is Question Mandatory : No Option Orientation : Vertical

Correct Marks : 1 Wrong Marks : 0.33

In Microsoft Word 2016, Mail Merge appears under the _____ menu tab.

Options :

1. ✘ Review
2. ✔ Mailings
3. ✘ View
4. ✘ References

Question Number : 73 Question Id : 2752286882 Question Type : MCQ Option Shuffling : Yes Is

Question Mandatory : No Option Orientation : Vertical

Correct Marks : 1 Wrong Marks : 0.33

What is the default extension of the files created in Microsoft Excel 2016?

Options :

1. ✘ .XLX
2. ✘ .XLS
3. ✘ .XLT
4. ✔ .XLSX

Question Number : 74 Question Id : 2752286883 Question Type : MCQ Option Shuffling : Yes Is

Question Mandatory : No Option Orientation : Vertical

Correct Marks : 1 Wrong Marks : 0.33

In Microsoft Excel, the _____ symbol is used to create an absolute cell address.

Options :

1. ✘ %
2. ✔ \$
3. ✘ &
4. ✘ =

Question Number : 75 Question Id : 2752286884 Question Type : MCQ Option Shuffling : Yes Is

Question Mandatory : No Option Orientation : Vertical

Correct Marks : 1 Wrong Marks : 0.33

How many cells will be present in the cell range C5:H20 in Microsoft Excel?

Options :

1. ✖ 6
2. ✖ 16
3. ✖ 22
4. ✔ 96

Question Number : 76 Question Id : 2752286885 Question Type : MCQ Option Shuffling : Yes Is

Question Mandatory : No Option Orientation : Vertical

Correct Marks : 1 Wrong Marks : 0.33

What is the default name of the first worksheet in a Microsoft Excel 2016 workbook?

Options :

1. ✔ Sheet1
2. ✖ Worksheet1
3. ✖ Wsheet1
4. ✖ S1

Question Number : 77 Question Id : 2752286886 Question Type : MCQ Option Shuffling : Yes Is

Question Mandatory : No Option Orientation : Vertical

Correct Marks : 1 Wrong Marks : 0.33

After entering data in the cell of a Microsoft Excel worksheet, press the _____ key(s) to move the cursor to the previous column.

Options :

1. ✔ Shift+Tab
2. ✖ Enter
3. ✖ Tab
4. ✖ Shift+Enter

Question Number : 78 Question Id : 2752286887 Question Type : MCQ Option Shuffling : Yes Is

Question Mandatory : No Option Orientation : Vertical

Correct Marks : 1 Wrong Marks : 0.33

Which of the following keyboard shortcuts can be used to move the cursor to the first cell of a Microsoft Excel worksheet?

Options :

1. ✔ Ctrl+Home
2. ✘ Ctrl+End
3. ✘ Ctrl+Right Arrow
4. ✘ Ctrl+Left Arrow

Question Number : 79 Question Id : 2752286888 Question Type : MCQ Option Shuffling : Yes Is

Question Mandatory : No Option Orientation : Vertical

Correct Marks : 1 Wrong Marks : 0.33

What will be the result of the following Microsoft Excel formula?

=ODD(4) + EVEN(7)

Options :

1. ✘ 9
2. ✘ 11
3. ✔ 13
4. ✘ 0

Question Number : 80 Question Id : 2752286889 Question Type : MCQ Option Shuffling : Yes Is

Question Mandatory : No Option Orientation : Vertical

Correct Marks : 1 Wrong Marks : 0.33

Which of the following appears as the second menu item in Microsoft PowerPoint 2016?

Options :

1. ✘ Insert
2. ✘ Design
3. ✔ Home

4. ✖ Review

Question Number : 81 Question Id : 2752286890 Question Type : MCQ Option Shuffling : Yes Is Question Mandatory : No Option Orientation : Vertical

Correct Marks : 1 Wrong Marks : 0.33

The 'format painter' appears under which of the following menu tabs in Microsoft PowerPoint 2016?

Options :

1. ✖ Insert
2. ✖ File
3. ✔ Home
4. ✖ Transitions

Question Number : 82 Question Id : 2752286891 Question Type : MCQ Option Shuffling : Yes Is Question Mandatory : No Option Orientation : Vertical

Correct Marks : 1 Wrong Marks : 0.33

Alignment options such as left, center, right and justify appear under the _____ command group in Microsoft PowerPoint 2016.

Options :


1. ✖ Clipboard
2. ✖ Slides
3. ✖ Font
4. ✔ Paragraph

Question Number : 83 Question Id : 2752286892 Question Type : MCQ Option Shuffling : Yes Is Question Mandatory : No Option Orientation : Vertical

Correct Marks : 1 Wrong Marks : 0.33

Which of the following menu tabs contains options such as zoom, fit to window and macros in Microsoft PowerPoint 2016?

Options :





1.  View
2.  Review
3.  Home
4.  Design

Question Number : 84 Question Id : 2752286893 Question Type : MCQ Option Shuffling : Yes Is Question Mandatory : No Option Orientation : Vertical

Correct Marks : 1 Wrong Marks : 0.33

Which of the following keyboard shortcuts can be used to duplicate selected slides in a Microsoft PowerPoint presentation?

Options :





1.  Ctrl+D
2.  Ctrl+M
3.  Alt+D
4.  Alt+M

Question Number : 85 Question Id : 2752286894 Question Type : MCQ Option Shuffling : Yes Is Question Mandatory : No Option Orientation : Vertical

Correct Marks : 1 Wrong Marks : 0.33

Which of the following keyboard shortcuts can be used to copy the color, size and font style of a piece of text and apply it to another piece of text in a Microsoft PowerPoint presentation slide?

Options :

1.  Ctrl+C
2.  Ctrl+Shift+C
3.  Ctrl+V
4.  Ctrl+Shift+V